




3 The time

1 Where are you usually at these times?

- 05.00
- 08.00
- 13.00
- 16.00
- 22.00

2 These clocks are reflected in a mirror.


Underline what time it really is.



a) ten thirty / eleven thirty



b) a quarter to nine /
a quarter past nine



c) five to nine / five past nine



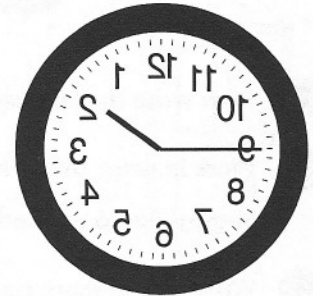
d) twelve o'clock / six o'clock



e) ten to four / ten past five



f) twenty five past four /
twenty five past five



g) a quarter to three /
a quarter to two

3 Work in groups. Solve the brainteaser.

It takes a grandfather clock 30 seconds to strike 6 o'clock.

How long will it take to strike 12 o'clock?

(The answer is NOT 60 seconds!)